

名字 _____ 月 _____ 日 星期 _____

回家作业 12/06/12


渴渴渴渴渴渴渴渴渴渴渴渴

渴渴渴渴渴

喝喝喝喝喝喝喝喝喝喝喝喝

喝喝喝喝喝

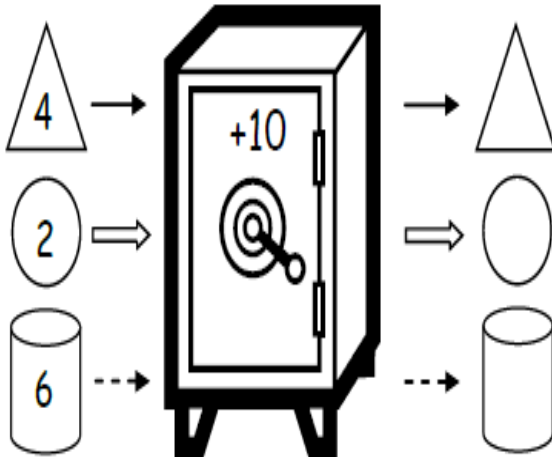
3. How many **more** dogs than doghouses?



4. Solve for the total.

9	8	7	7
+9	+9	+7	+8

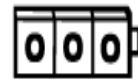
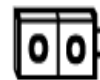
5.



10 More Machine

6. Solve.

$$2 + 3 = \underline{\quad}$$



Think

$$\underline{\quad} + \underline{\quad} + \underline{\quad}$$